

# Math Basics

## Week Nineteen

$$265,103 + 6,254 = \underline{\hspace{2cm}}$$

5	4		1	2	
				1	
		4			5
2			4		
	1				
	6	3		5	1

-----

Feet      Mile      Inch      Pound      Ounce      Cups      Gallon

Choose a form of measurement for each:

School desk \_\_\_\_\_ Swimming pool \_\_\_\_\_ Eraser \_\_\_\_\_

Distance to Goshen \_\_\_\_\_ Golden retriever \_\_\_\_\_

Bowl of soup \_\_\_\_\_ Snack cracker packet \_\_\_\_\_

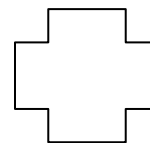
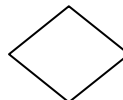
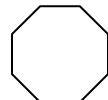
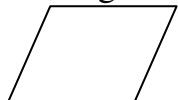


-----

**Circle the numbers that are ODD numbers and put squares around the EVEN:**

43      68      104      7,891      33,556      901      89,605

-----

Color the shapes that have right angles?



-----

MEATS: Chicken \$5, steak \$8

VEGETABLES: Broccoli \$2, Carrots \$3, Potatoes \$4

FRUITS: Oranges \$1.50, Bananas \$1.25, Strawberries \$2.50

BREAD: Whole wheat \$1.75, Bagel \$1.00, Garlic bread \$2.00

Choose one item from each food group for your pretend dinner. List them below and tell how much your meal will cost. **SHOW YOUR WORK:**

